



Crowle Primary Academy

Believe and you can achieve

WOW Learning

Look at what we have been doing this week in our learning (18.2.21)



Crowle Primary Academy

Believe and you can achieve

Tawny Owls

Bailie

Rearrange the words in the question below to make it a **statement**.
Do not use additional words. Remember to punctuate your sentence correctly.

1 mark

Is this book new?

This book is new. ✓

1 mark

Every day. Still. She always come. Every day. still. Rose's heart ached for how hungry the children were. Every day. Still. The concentration camp's children's hunger engulfed them until they would like silent, lifeless ghosts. A shot. A deafening shot. A deafening shot rang rang through the lost shadows. Fog mingled with Malar. Rose fell on the ground.

Emily

Holding the boy by the scruff of his neck, the mayor brought him to a glowlessly dressed soldier whose uniform was black as the night sky.

"Help! Leave me alone; I want my mum," cried the boy.

The soldier laughed menacingly as the boy was dragged away kicking and screaming and thrown into the back of the truck. The doors closed with a slam.

Her worry for the young boy took hold of her as she followed the sludgy, uneven tracks made by the truck.

Hesitating at the sign (which displayed NO ENTRY) she questioned where are they taking him? Should I carry on?

Heart racing, muscles tensed, teeth clenched, she moved on.

Rose ducked under the barrier towards the field.

The angry sky was filled with grey clouds, thunder and cold winds. With a sad cry, Rose looked on at the rusty wire, pale faces and scruffy clothes.

The children were frozen. The children were silent.

The children were terrified. Rose needed to help.

As the days were getting colder, mother hurriedly collected more fire-wood whilst Rose became consumed with worry. The haunting memory of the starving children shot through her heart like a speeding, silver bullet. Unable to erase this tragic image from her mind, Rose stuffed her school satchel with as much as good as she could carry.

In went the warm crusty bread. In went the nearly stale cheese. In went the chunky vegetable stew.

Darcy

Monday 8th February
I am learning to identify the locations of the Anglo-Saxon Kingdoms and settlements

Why did the Romans leave Britain? The Romans were under attack and the empire was falling apart.	Why did the Anglo-Saxons invade Britain? to help keep out the invaders of Scotland and Ireland.
Where did the Anglo-Saxons come from? northern Europe who settled in England in the 5th and 6th centuries. Denmark, Germany and the Netherlands.	What skills did the Anglo-Saxons have? tall, fair-haired men armed with swords and spears. hunting, farming and textile production.

I am learning to identify the locations of the Anglo-Saxon Kingdoms and settlements including the local area

Using your map and the table to show you the language origins, record your findings.

Place name	Kingdom	What does the name mean?
Lakenheath	East Anglian	lake
Hamsterley	Northumbria	Village
Finnigly	Mercia	clearing
Scoter Scotton	Mercia	Small hut.
Nettlestead	Kent	farm
Auckley	Mercia	clearing
Fishlake	Mercia	lake
Belton	Mercia	farm/village



Crowle Primary Academy

Believe and you can achieve

Eagle Owls

Alexander

Feelings activity

J Dear Joe, I saw that you think that you're less perfect than others yet you're you and you're so unique and so different and that's good. You being yourself is better than thinking that you wish you was as perfect as someone else. Even if they look perfect it's the internet and it's filled with a lot of fake things including people's pictures.

I'm here for you so keep thinking about positive things, love now see you later from Alexander.

Ethan

Thursday 11th February 2021

I can write specific sentences for a narrative

When
time after time, every day,
still, during this time, today,
during the war, tomorrow,
the day after.

how
curiously, still, nervously
with a wet gait
with a gait

quick and, thick, ~~see~~ quick and
dark ~~dark~~ ~~to~~ ~~the~~ ~~clouds~~
ominous

Engorged or consumed

tanks, Rocket launchers,
spitfires, M-16, bombs, AK47

destroyed, demolished, glow
exploded, erupted

- 1. Statement ✓
- 2. Command ✓
- 3. Statement ✓
- 4. Question ✓

4
4

2) click ✓

3) "Is the band playing at the festival?" asked Jane ✓

4) This book is new! ✓

Every day of time after time. She went every day. Every day. Time after time. Her without gait her heart pounded for how nervous they were. Every day. Time year time. The concentration camps into habitues ^{more like} hunger endlessly consumed of ^{the} ^{way} of hunger until they moved like quick and, thick, sticky quick and. A bang. A loud bang. A bang that erupted with + noise. Fog & enveloped in murder. Rose fell.

*ear splicing

KYLO
REN

KYL
RE

Phoenix

Q1 = cone = 8 cuboid = 7
H Prism = 3 cylinder = 1
P Prism = 5 Cube = 4
tetrahedron = 2 SB Pyramid = 4
T Prism = 6

Q2 =	T	BB	P	C
	tetrahedron	cylinder	pyramid	cube
6	0	5	8	
4	2	8	12	
5	3	5	6	

Q3 = 1 = T Prism 2 = cone
4 vertices Ice cream

Q4 = 1 = pyramid 2 = tetrahedron

Testbase

Q1 = F = 6 ✓ E = 12 ✓ V = 8 ✓

Q2 = F = 6 ✓ E = 12 ✓ V = 8 ✓

Q3 = T Prism ✓ Q4 = F = 10 ✗ E = 16 ✗

Q5 = No ✓



Crowle Primary Academy

Believe and you can achieve

Snowy Owls

Dylan

Wednesday 10th February 2021

I can use clues to make predictions.

1) Common House Broomie.
Children
House.
Jar with a candle in.
Fencing Pole.
Book
Cup pot.

2) Library

3) A story about magical creatures.

4) It tells you all about the book to make you want to read it.

5) It sounds exciting.

6) Judged SA Simon and Mallory.

7) No because they are characters in the book and not real.

8) I think this book is a fairytale and it is fiction.

9) Yes

10) It helps you to imagine what's happening.

11) It looks old.

12) All used.

Lola

Order the decimal numbers

1) 0.7, 0.07

$$\boxed{0.07} > \boxed{0.7}$$

2) 0.57, 0.5

$$\boxed{0.57} < \boxed{0.5}$$

3) 2.3, 3.2, 0.23

$$\boxed{3.2} < \boxed{2.3} < \boxed{0.23}$$

4) 0.81, 0.8, 0.08

$$\boxed{0.08} > \boxed{0.8} > \boxed{0.81}$$

5) 0.66, 0.6, 0.61

$$\boxed{0.6} > \boxed{0.61} > \boxed{0.66}$$

6) 4.51, 4.15, 4.5

$$\boxed{4.51} < \boxed{4.5} < \boxed{4.15}$$

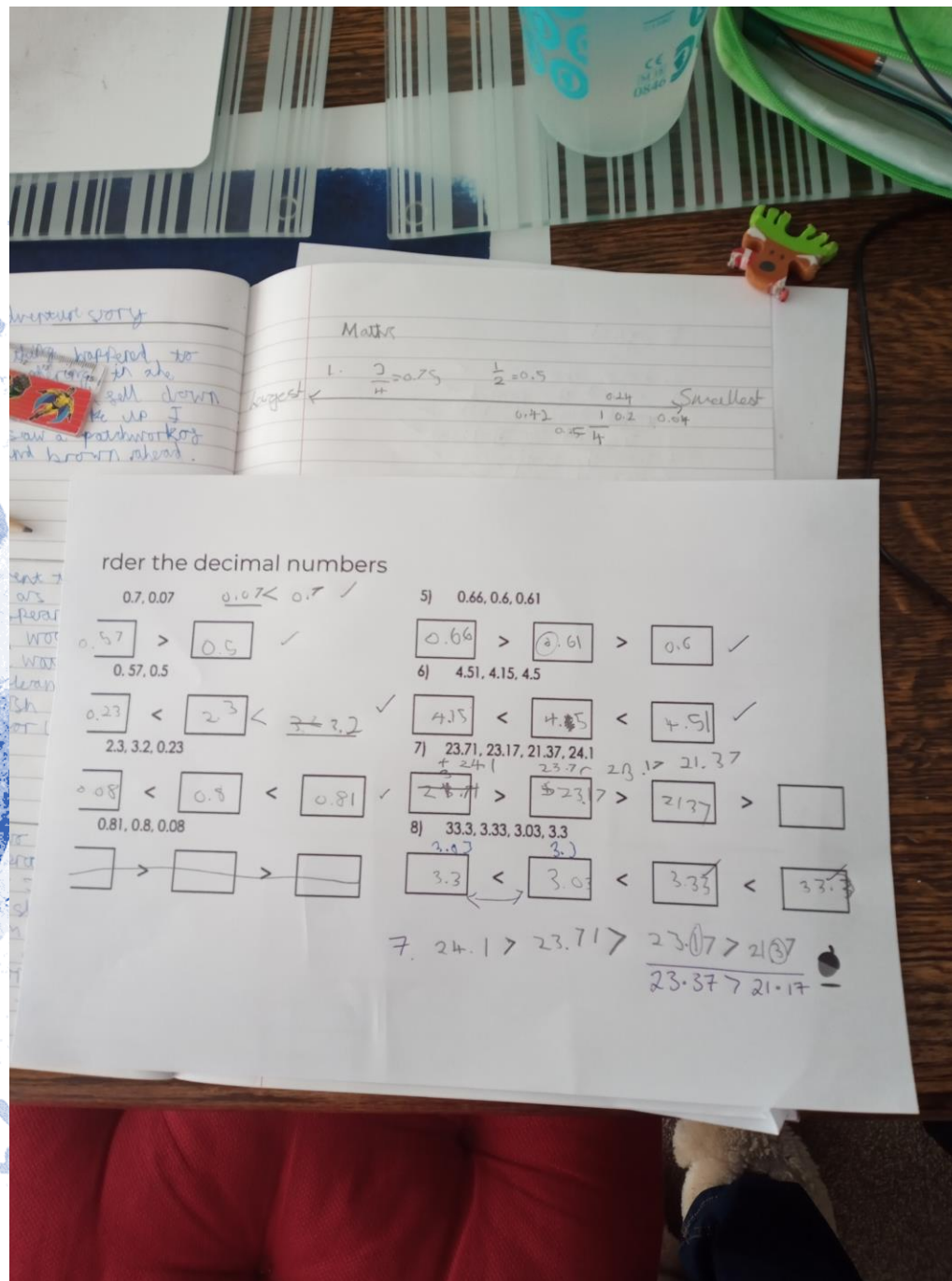
7) 23.71, 23.17, 21.37, 24.1

$$\boxed{21.37} > \boxed{23.17} > \boxed{23.71} > \boxed{24.1}$$

8) 33.3, 3.33, 3.03, 3.3

$$\boxed{33.3} < \boxed{3.33} < \boxed{3.3} < \boxed{3.03}$$

James





Crowle Primary Academy

Believe and you can achieve

Forest Owls

Summer

Friday 5th February 2021

I can write an adventure story.

The boy woke up in the dark cave. He looked around and saw drawings of bears, wild horses and large deer on the walls. He shouted

Oh but she wasn't there. Slowly he got up and sounded his way out.

The sun was shining brightly on him. He had to get back to his family as quickly as he could but where were they? He ran and ran and ran until he found them. He told about his adventure. Was it just a dream?

Oscar

Thursday 11th February 2021.

Mr
SCOTT
WON
my friends
and I
Today I am very at a hall that looked
very nice. I opened the big brown door and
it was very nice.
I felt like I was not alone. I felt something
was going to happen and catch me the
floor and paper and that's when I heard
the rushing. The hallway was half light and
towards the end was a small space.



Dominic

10.2.21 Arith. Magic

1.	30	✓
2.	102	✓
3.		
4.	481	✓
5.	56	✓
6.	4	✓
7.	4	✓
	<u>7</u>	
8.	70	x
9.	563	✓
10.	48	✓
11.	502	✓
12.	40	✓
13.		
14.	42	x
15.		
16.	50	✓
17.	120	x
18.	483	✓
20.	181	x

397
165
402

524
29
553
1

4
563
483



Crowle Primary Academy

Believe and you can achieve

Spectacled Owls

Matilda

How Jesus was
a good friend

By listening to other
people around him.


By being kind.

By seeing if they are scared
of the dark.

How you can be
a good friend.

By sharing with other
people. By seeing if people
are hurt. By playing nicely with
other people. Listening to other
people's problems.

Sophie



Eva

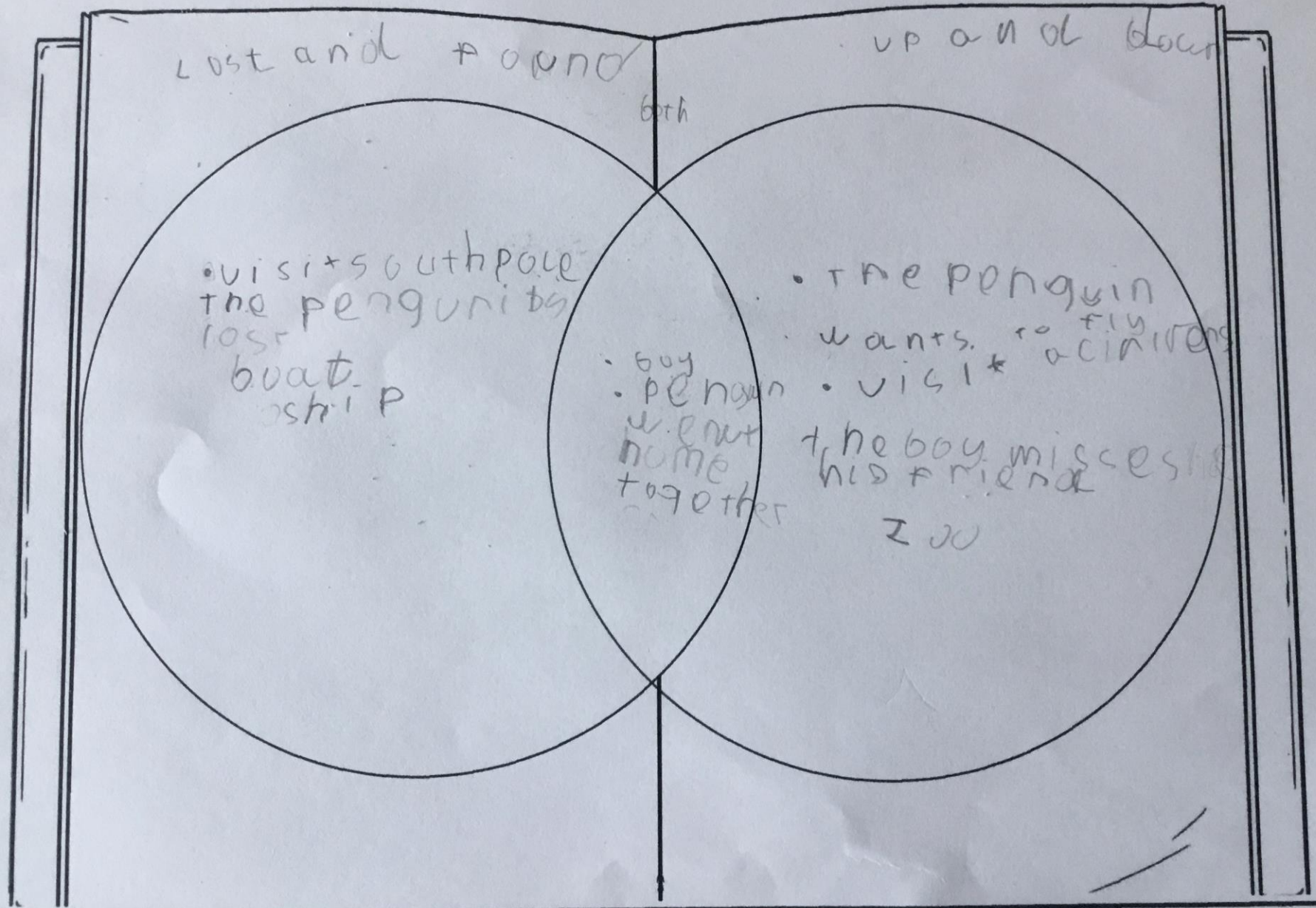
English 10th Feb

I think the best Oliver Jeffers book is...
the way back home
because... they go to space.



Comparing Two Stories by the Same Author

Two stories by the same author and compare them using the Venn Diagram below.



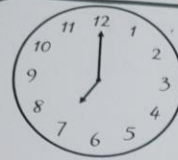
Charlie

Otis

Maths

10/2/21

Example:



The time is seven o'clock

in the morning


and I would be waking up



The time is half past three

in the morning

and I would be a sleep



The time is half past ^{twelve}

in the afternoon

and I would be having tea

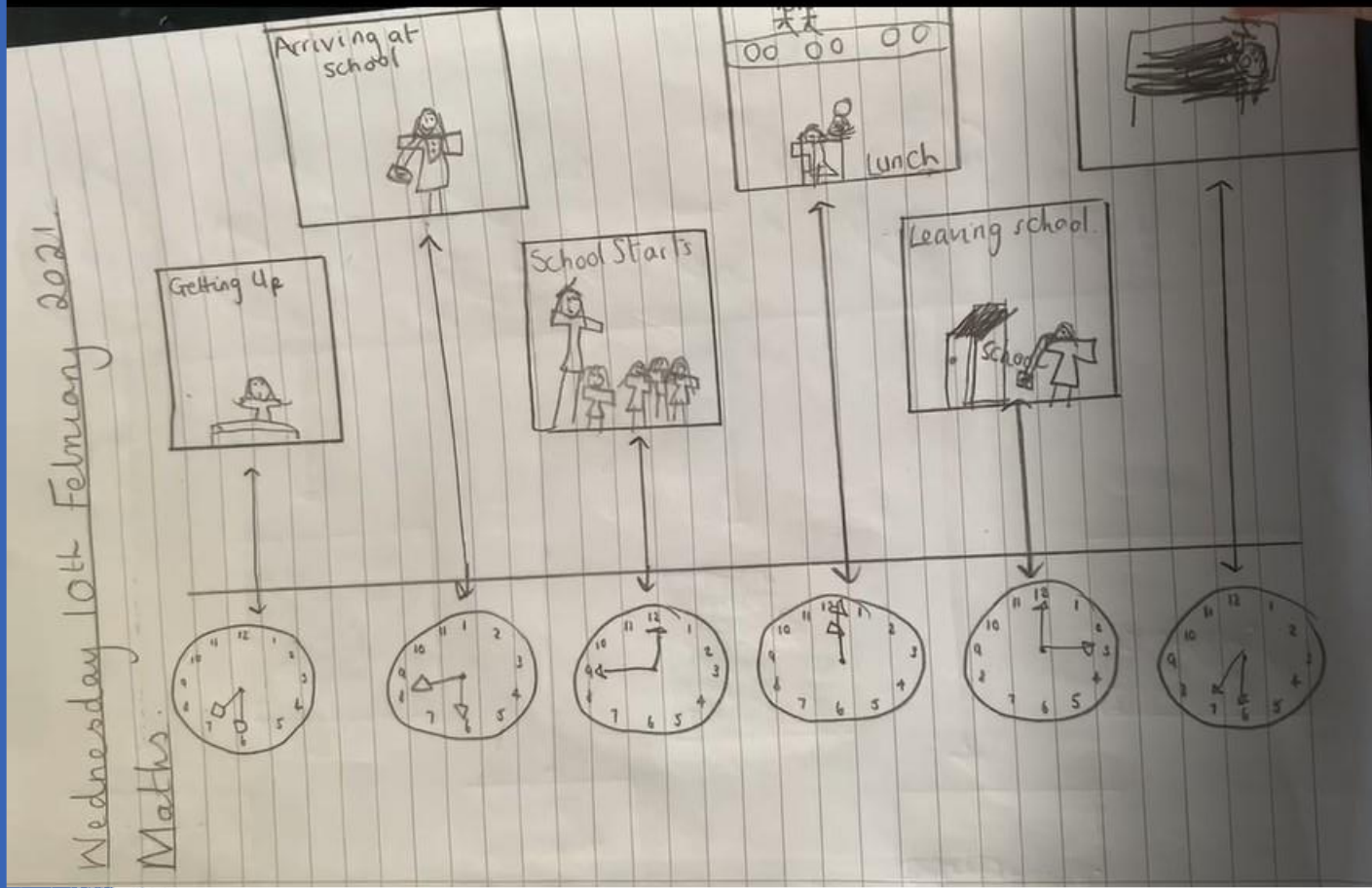


The time is five o'clock

in the afternoon

and I would be cooking tea

Betsy





Crowle Primary Academy

Believe and you can achieve

Spotted Owls

Susie

9-2-21

Tuesday- Create a Venn diagram to compare these books.



circus



space

lost penguin
splash
cabin

Both
boy
penguin

moon
alien
planet
spaceship
Home

Summer



Koen

English
LOST AND



Found.

By
Oliver
Jeffers

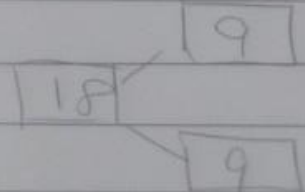
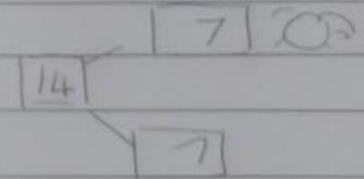
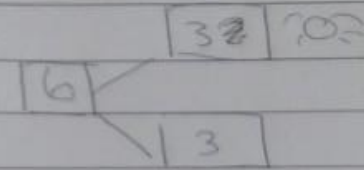
I think the best
book is lost and
found because I like
when they go to
the south pole.

Bella

Tuesday 9th February 2021

R R R R R R R R R R R R R R R R
S s S s S s S s S s S s S s S s S s S s
T t T t T t T t T t T t T t T t T t
The cat is fluffy and fluffy and
fluffy up and down with penguin
and fluffy balloon

balloon
troop $6 \div 2 = 3$ ✓
cooking $10 \div 2 = 5$ ✓
sneezy $14 \div 2 = 7$ ✓
broom $20 \div 2 = 10$ ✓
scoop $18 \div 2 = 9$ ✓
baboon
restoon





Crowle Primary Academy

Believe and you can achieve

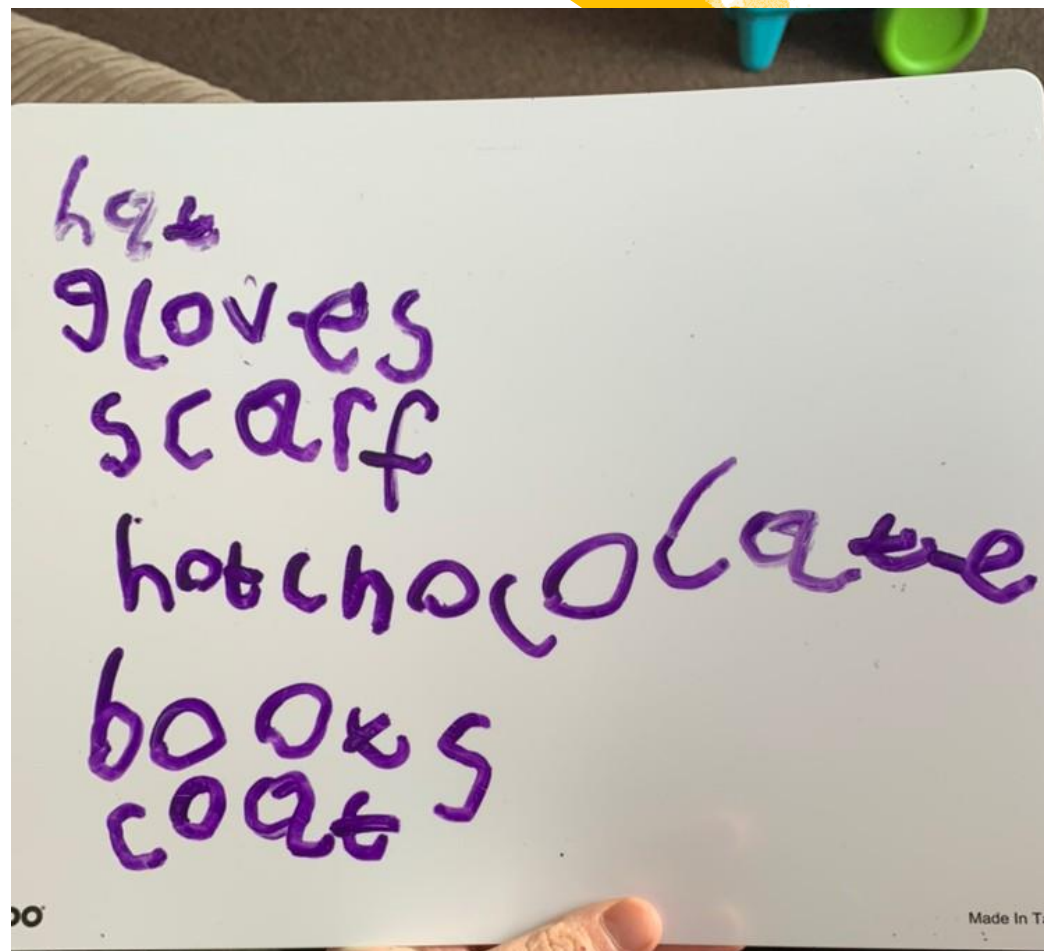
Little Owls

Edie and Ted



Olivia





Ellie

Finley

