



Crowle Primary Academy

Believe and you can achieve

WOW Learning

Look at what we have been doing this week in our learning



Crowle Primary Academy


Believe and you can achieve




Tawny Owls

Equivalent fractions

Chloe

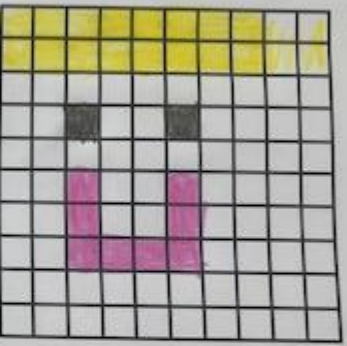
1. B ✓ C A







I have coloured half of the shape  _____
I have coloured one fifth of the shape  _____
I have coloured one tenth of the shape  _____


$\frac{2}{10}$ of the shape has been left blank.

Ready for a challenge?



YOU CH

I have coloured one quarter of the shape  _____
I have coloured two fifths of the shape  _____
I have coloured one tenth of the shape  _____
I have coloured one twentieth of the shape  _____

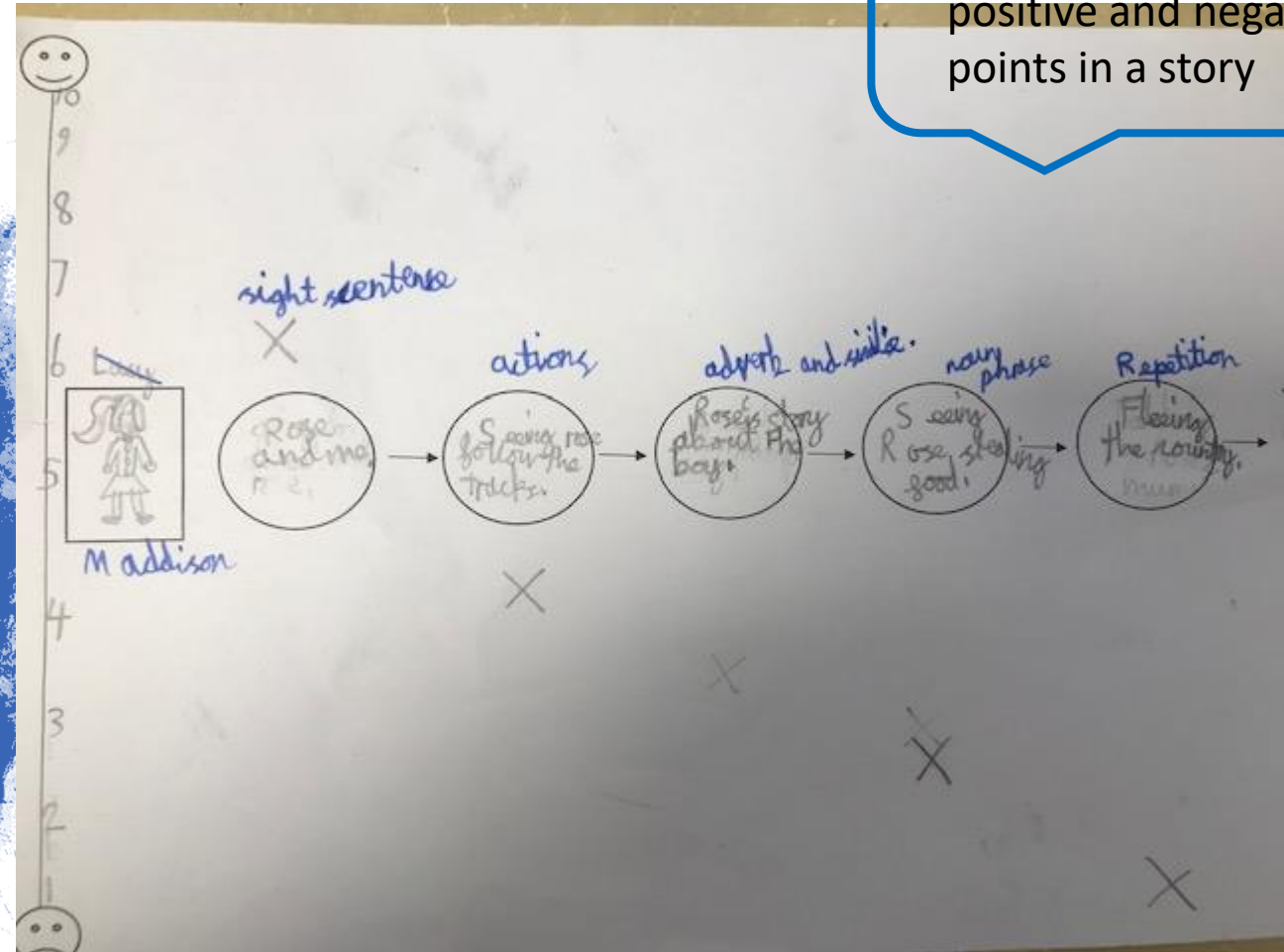


$\frac{20}{100}$ of the shape has been left blank.

Ask a parent/carer to help you draw the grids (use a ruler).

Sebastian

Story planning,
thinking about the
positive and negative
points in a story



William


I have coloured half of shape blue
I have coloured one fifth of the shape green
I have coloured one tenth of the shape purple
 $\frac{1}{5}$ of the shape has been left blank.

I have coloured one quarter of the shape blue
I have coloured two fifths of the shape green
I have coloured one tenth of the shape purple
I have coloured one twentieth of the shape grey
 $\frac{2}{10}$ of the shape has been left blank.

Equivalent fractions

William

Wonderful history learning





Crowle Primary Academy

Believe and you can achieve

Eagle Owls

Ethan

Thursday 29th February 1944
I can see evidence to support my answer

Britain winning the war High spirits, these periods history. Selby chose upon all. No ground to get that they stand in line together!	Things are going badly. Bombing to the police have seen across killed and many injured. The hospital are bombed. Twelve cases climbering over debris After an air raid I injured one. Bombed ways. The car are poisonous. Old men, little children crippled. The bomb have completely lost their self- control. The city turned into an enormous, noisy, smoky garage, smoking black smoke. Down came the bombs You could hear the going over the top with a low whistling.
---	--

Maybe


- Britain was winning the war because ^{was more} ~~was~~ the heroic period of our history, which suggests that our soldiers were succeeding.
- Britain was losing the war because I'd say 'they were climbing over debris,' which suggests they were bombed.

KYLO

Great presentation of sentences!

Equivalent fractions

Hollie



I have coloured half of the shape Blue

I have coloured one fifth of the shape Red

I have coloured one tenth of the shape Green

$\frac{2}{10}$ of the shape has been left blank.

have coloured one quarter of the shape $\frac{25}{100}$

have coloured two fifths of the shape $\frac{40}{100}$

have coloured one tenth of the shape $\frac{10}{100}$

have coloured one twentieth of the shape $\frac{5}{100}$


$\frac{2}{100}$ of the shape has been left blank.



$\frac{10}{100}$

Ready for a challenge?

$\frac{40}{100}$



YOU CHO

$\frac{15}{100}$

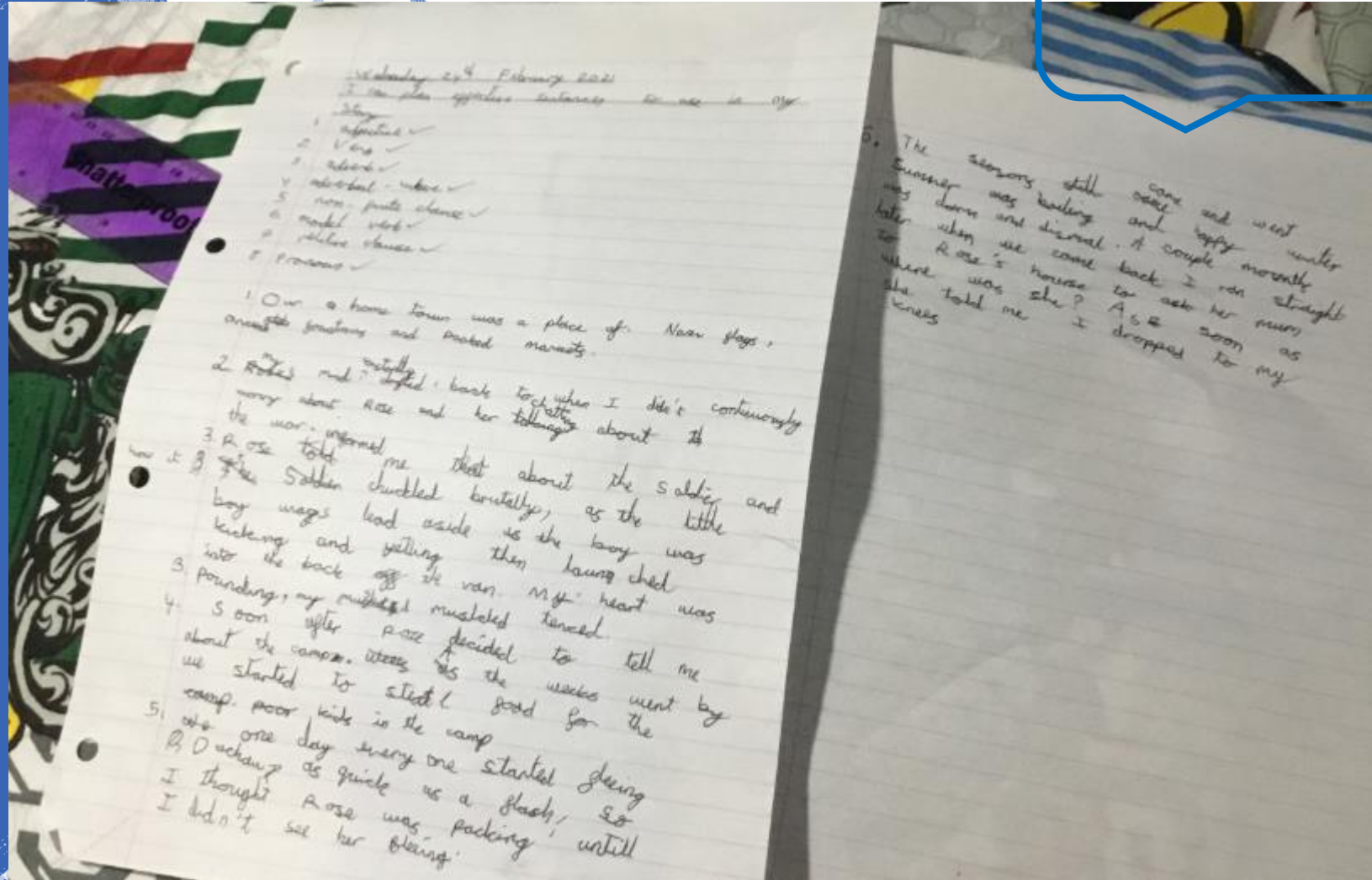
$\frac{30}{100}$

$\frac{10}{100}$

Ask a parent/carer to help you draw the grids (use a ruler).

Fantastic writing

Katie



Phoenix

Wednesday 24th February 2021
I can plan effective sentences to use in my story

1. Rose, who loved walking with me, always be very sociable (like me).
2. Children running eager to get to school, kids riding their scooters and having fun, parents doing their morning shopping.
3. When Rose shows me to the concentration camp, all I could think is "they look so pale, they look like creepy lost shadows waiting for food."
- 4.3.2: "Freezing at the sign (which displayed NO TRESPASSING), I questioned if I should go on". I couldn't believe that there was such a place like that.
4. When Astina went by, Rose was stealing food but I was still filled with fear. I still came with her but I didn't take but I was filled with fear even more.
5. "I'm leaving, bye," I said. Rose shouted, "I'm just off to feed the children one more time.", but I didn't hear her. I was filled with anxious. What is something bad happened to her? I didn't see her family.
6. I went back to Dachau. It was a place full of ripped Nazi flags, broken.

Great vocabulary and accurate use of punctuation

Wil

Wednesday 22th February 2021
English

1. adjective
2. verb
3. adverb
4. adverbial phrase
5. noun phrase clause
6. modal verb
7. relative clause
8. Prepositional

1. James, who was Rose's best friend, skipped brightly and happily along the chanting streets.

2. His thoughts drifted back to times when you could walk the streets unsupervised and play with Rose after dark.

3. Rose said to me that a smartly dressed soldier whose uniform was as black and white as a zebra stripes captured a boy by the scruff of the neck and threw him into a black van. The black van then led me Rose to a concentration camp full of innocent, cold and famished children Rose said to me.

4. James galled unmercifully quivering and galled from my his car galled like a hawk stealing eggs from a bird's nest.

5. panic - increasing panic - increasing panic
my generous other yet so
scared in his eyes

6. James searched and searched and searched to helplessly but then came to the sad conclusion that Rose had been killed he then when went to the concentration camp were one uttered Rose stood.

Handwriting

an an an an an an an an an
 an an an an an an an an an
 at at at at at at at at at at
 at at at at at at at at at at
 ant ant ant ant ant ant ant
 ant ant ant ant ant ant ant
 er er er er er er er er er
 er er er er er er er er er
 it it it it it it it it it it
 it it it it it it it it it it
 ent ent ent ent ent ent ent
 ent ent ent ent ent ent ent
 ss ss ss ss ss ss ss ss ss
 ss ss ss ss ss ss ss ss ss
 as assistant assistant assistant
 assistant assistant assistant
 pp pp pp pp pp pp pp pp pp
 pp pp pp pp pp pp pp pp pp

Impressive sentences and presentation.



Crowle Primary Academy

Believe and you can achieve

Forest Owls

Charlie

Tuesday 23rd February 2021
can interpret characters using
evidence from the text.

Jared Grace

lonely: Not that anyone asked him
Not that anyone asked him a question
or anything at all
helpful as he turned to follow
Simon out to install the car.

sad: He wished this was some kind
of gimmicky vacation and not
real life

Simon Grace

curious: Simon looked at
the wall with interest

animal lover: I always
wanted a squirrel.

Mallory Grace

athletic: he was olympic
level

mean: in jail car shanking
someone with a sword.

Great use of text to
find answers

Ella

What a lot of maths!

Warm up

1. $4 \sqrt{8} \sqrt{10} \checkmark$
2. $16 \div 32 \checkmark$
3. $64 \checkmark$

1. $30 \div 10 = 3 \checkmark$
2. $16 \times 4 = 64 \checkmark$
3. $15 \div 3 = 5 \checkmark$
4. $20 \times 4 = 80 \checkmark$

$9 \times 10 = 90 \checkmark$
 $10 \times 9 = 90 \checkmark$
 $10 \div 10 = 1 \checkmark$
 $40 \div 4 = 10 \checkmark$

1) $5 \checkmark$
2) $4 \checkmark$
3) $3 \checkmark$
4) $1 \checkmark$

Maths meeting

1. $10 \cdot 10 \checkmark$
10 past 10 \checkmark

2. 10 minutes to 1 \checkmark 12:50 \checkmark

3. 25 past 7 \checkmark 7:25 \checkmark

4. 25 minutes past 3 \checkmark 3:25 \checkmark

7mm \checkmark 7cm \checkmark 3m \checkmark 30cm \checkmark 3m and 35cm \checkmark

$1 + 1 + 3 + 3 = 8m$
 $20 + 20 + 5 + 5 = 50m$ P = 8m and 50cm \checkmark

$15 + 15 + 5 + 5 = 40m$
 $10 + 10 + 6 + 6 = 32cm$ P = 40m and 32cm \checkmark

Part A
Use your times-tables knowledge to complete t

x	7	6	9	3
2	14	12	18	6
4	28	24	36	12
10	70	60	90	30
5	35	30	45	15

Part B
Can you spot the mistakes below?
Can you correct them?

1) $4 \times 5 = 20 \checkmark$
2) $50 \div 5 = 5$ \times $50 \div 5 = 10 \checkmark$
3) $4 \div 4 = 12$ \times $4 \div 4 = 1 \checkmark$
4) $3 \times 5 = 15 \checkmark$
5) $9 \div 3 = 27$ \times $9 \div 3 = 3 \checkmark$
6) $60 \div 6 = 10 \checkmark$
7) I share 4 sweets equally among 12 friends. How many of them get? \times
 $12 \div 4 = 3 \checkmark$

Fantastic
sentences!

Rose

~~As~~ abruptly, as quickly as a flash
HOW STRANGE JARED thought to himself. am
I still asleep? I must find out!
suddenly, the same rustling noise was
heard again "AM I still dreaming?"
Jared asked aloud, unsure of who would
answer him.



Rose



Crowle Primary Academy

Believe and you can achieve

Forest Owls

Alfie


Wednesday 10th February 2021

Hundreds	Tens	ones	• tenths
	4	2	9
	70	2	0.9
	2	0.9	0.01
	10	7	0.8107

$429 = 4 + 0.2 + 0.09$ ✓
 $72.9 = 70 + 2 + 0.9$ ✓
 $2.91 = 2 + 0.9 + 0.01$ ✓
 $17.87 = 10 + 7 + 0.8 + 0.07$ ✓
 $85 \div 10 = 0.85$ ✓
 $0.24 \div 10 = 0.024$ ✓
 $0.73 \div 10 = 0.073$ ✓
 $1 \div 10 = ~~10~~ 0.1$ ✓
 $736 \times 10 = 7360$ ✓
 $53 \times 10 = 530$ ✓
 $8.5 \times 10 = 85$ ✓

Challenging maths learning

Harry



Lots of patience
and resilience
needed!

Izzy

Monday 22nd February 2021

What is light

Light is a wave of energy
What is light is a wave it can only travel in a straight line.
that travels in a wave pattern

What is dark. Dark is absence of light
gone over

sources of light	Not sources of light
Sun ✓	apple ✓
firefly ✓	torch ✗
lightbulb ✓	chair ✓
candle ✓	sun glasses ✓
to torch ✓	

1. From the window and the sun ✓
2. Light bulb ✓

Light comes from a light source. ✓
Light is a wave of energy. ✓


Dark is absence of light. ✓
Sun. ✓

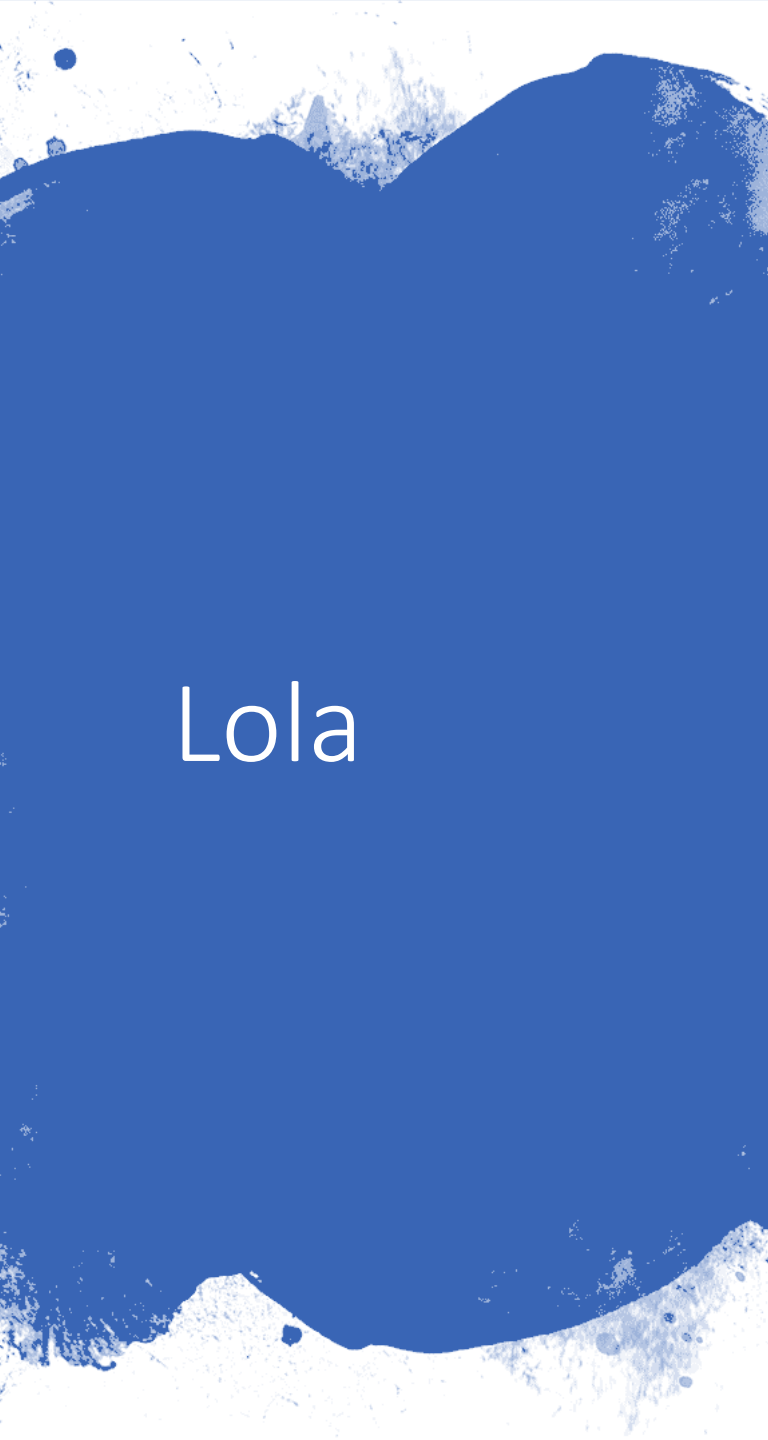
Light travels in straight lines. ✓

Great to see some editing to make it even better.

Lucy

Lots of patience
and resilience
needed!





Lola

Monday 22nd February 2021

What is light?

travels in a wave from a light source.
light is a type of energy that
what is light, light is an opposite of an absence and a
resource and the opposite of dark.
what is dark, dark is an absence and the opposite
of light.

sources of light	not sources of light
sun ✓	apple ✓
candle ✓	chairs ✓
glue ✓	sun glasses ✓
torch ✓	
eyeglasses ✓	

A: light from the ~~table~~ sun and shining through the window.
B: lightbulb.

light comes from a light source. ✓
light is a type of energy. ✓

Dark is the absence of light. ✓

sun ✓
light travels in a straight lines. ✓

Great to see some editing to make it even better.

McKinley

For equivalent fractions

1 and 2 with denominator 4

Fractions Wall

$\frac{1}{12}$	$\frac{1}{11}$	$\frac{1}{10}$	$\frac{1}{9}$	$\frac{1}{8}$	$\frac{1}{7}$	$\frac{1}{6}$	$\frac{1}{5}$	$\frac{1}{4}$	$\frac{1}{3}$	$\frac{1}{2}$	$\frac{1}{1}$
$\frac{1}{11}$	$\frac{1}{10}$	$\frac{1}{9}$	$\frac{1}{8}$	$\frac{1}{7}$	$\frac{1}{6}$	$\frac{1}{5}$	$\frac{1}{4}$	$\frac{1}{3}$	$\frac{1}{2}$	$\frac{1}{1}$	
$\frac{1}{10}$	$\frac{1}{9}$	$\frac{1}{8}$	$\frac{1}{7}$	$\frac{1}{6}$	$\frac{1}{5}$	$\frac{1}{4}$	$\frac{1}{3}$	$\frac{1}{2}$	$\frac{1}{1}$		
$\frac{1}{9}$	$\frac{1}{8}$	$\frac{1}{7}$	$\frac{1}{6}$	$\frac{1}{5}$	$\frac{1}{4}$	$\frac{1}{3}$	$\frac{1}{2}$	$\frac{1}{1}$			
$\frac{1}{8}$	$\frac{1}{7}$	$\frac{1}{6}$	$\frac{1}{5}$	$\frac{1}{4}$	$\frac{1}{3}$	$\frac{1}{2}$	$\frac{1}{1}$				
$\frac{1}{7}$	$\frac{1}{6}$	$\frac{1}{5}$	$\frac{1}{4}$	$\frac{1}{3}$	$\frac{1}{2}$	$\frac{1}{1}$					
$\frac{1}{6}$	$\frac{1}{5}$	$\frac{1}{4}$	$\frac{1}{3}$	$\frac{1}{2}$	$\frac{1}{1}$						
$\frac{1}{5}$	$\frac{1}{4}$	$\frac{1}{3}$	$\frac{1}{2}$	$\frac{1}{1}$							
$\frac{1}{4}$	$\frac{1}{3}$	$\frac{1}{2}$	$\frac{1}{1}$								
$\frac{1}{3}$	$\frac{1}{2}$	$\frac{1}{1}$									
$\frac{1}{2}$	$\frac{1}{1}$										
$\frac{1}{1}$											

Handwritten notes on the left side of the page include:

- $\frac{1}{2} = \frac{2}{4} = \frac{3}{6} = \frac{4}{8} = \frac{5}{10} = \frac{6}{12}$
- $\frac{1}{3} = \frac{2}{6} = \frac{3}{9} = \frac{4}{12}$
- $\frac{1}{4} = \frac{2}{8} = \frac{3}{12}$
- $\frac{1}{5} = \frac{2}{10} = \frac{3}{15}$
- $\frac{1}{6} = \frac{2}{12} = \frac{3}{18}$
- $\frac{1}{7} = \frac{2}{14} = \frac{3}{21}$
- $\frac{1}{8} = \frac{2}{16} = \frac{3}{24}$
- $\frac{1}{9} = \frac{2}{18} = \frac{3}{27}$
- $\frac{1}{10} = \frac{2}{20} = \frac{3}{30}$
- $\frac{1}{11} = \frac{2}{22} = \frac{3}{33}$
- $\frac{1}{12} = \frac{2}{24} = \frac{3}{36}$

Fantastic presentation

Riley

Friday 12th February 2021
I can write a diary account.

one day, we finally arrived at what would be our new home. I stared at the raggy steps and I realised this house was like a shack! A collection of shacks, every single window out or smashed. Why? I stepped over the threshold in to a batt dull dark hallway. Slowly my eyes looked on the stained glass window at the top of the stairs, it allowed light to shatter amongst the dust miles casting a rainbow of colours. I felt nervous! I heard a sound my fear soared like an eagle. What could that be? Was the house whispering to me? Why had mum insisted we move here? One silly fight and we've moved! Tap, tap, tap. I shivered and ran to find my mum.

Wow, look at that sentence!

Lucy

Monday 22nd February 2021

What is light

What is light light is a type of energy that travels
light is a source of ~~the~~ bright light it waves from from light sources

What is dark

Dark is ~~where~~ where there is no light in a room

<u>Source of light</u>	<u>Not source of light</u>
Sun ✓	Sunglasses ✓
chair torch ✓	apple ✓
light bulb ✓	chair ✓
candle ✓	
firefly ✓	

~~The~~ The light is coming from the ^{SUN} windows

The light is coming from the light bulb

Light comes from a light source ✓

Light is a type of energy ✓

Dark is the absence of light ✓

~~Sun~~ sun ✓

Light travels in ~~str~~ straight lines

Great to see some editing to make it even better.



Crowle Primary Academy

Believe and you can achieve

Spectacled Owls

Working on presenting our work beautifully

Betsy

Tuesday 23rd February 2021
English

The greatest Fairy tale disaster


- Rapunzel
- Cinderella
- Hansel and Gretel
- Jack and the Beanstalk
- Snow White
- Goldilocks and the three bears
- Princess and the frog
- Three Billy Goats Gruff
- Sleeping Beauty
- The Three Little Pigs

I think Rapunzel is the best book to visit because she has long beautiful hair and I would love to climb up it.

Ashton

Tricky new learning

Part 1




$\frac{1}{2}$

Numerator
1 equal part is highlighted.

Denominator
There are 2 equal parts altogether.

Part 2




$\frac{2}{4}$

Numerator
2 equal parts are highlighted.

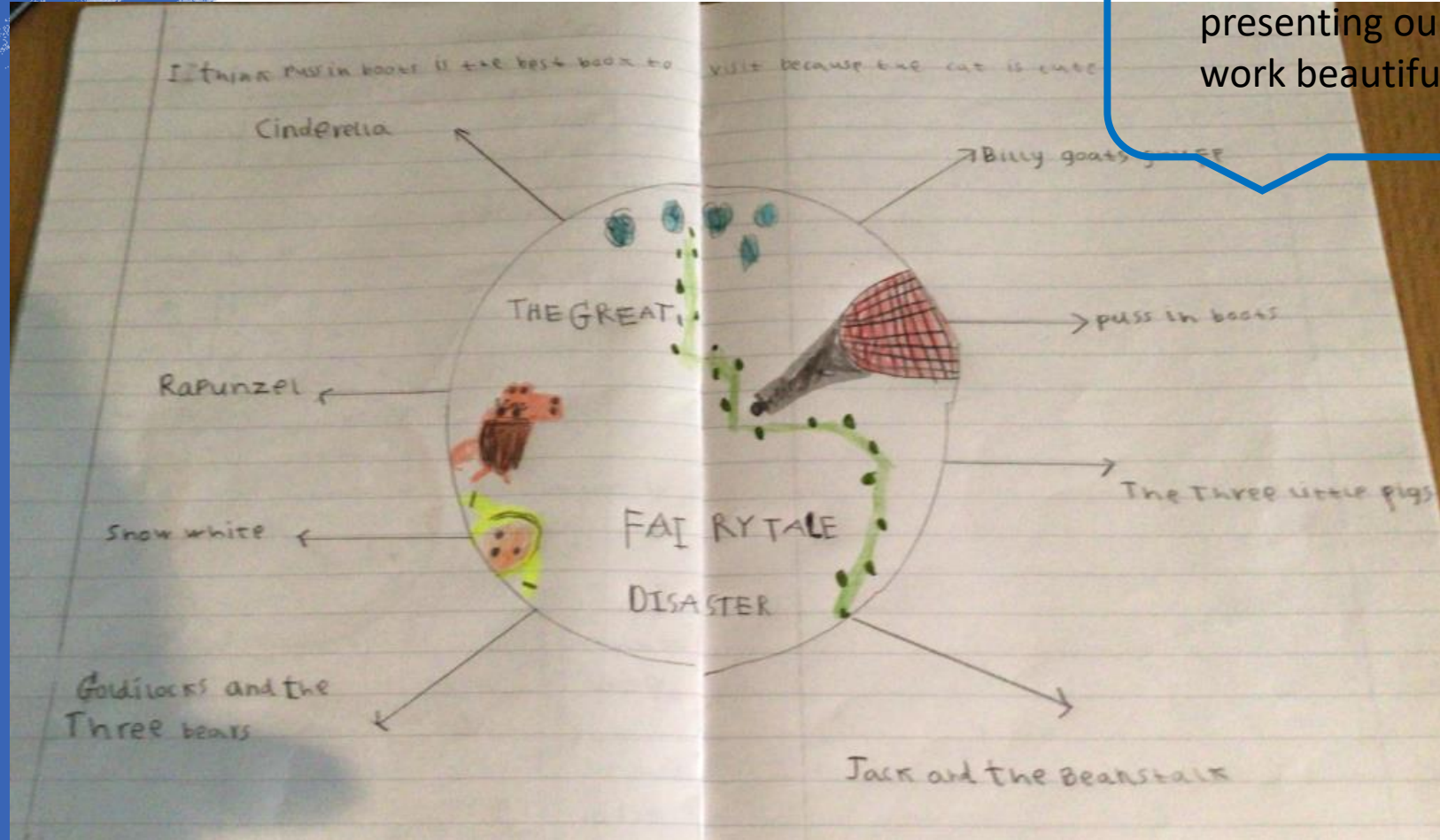
Denominator
There are 4 equal parts altogether.

Charlie

Enjoying fractions
learning with things
found at home



Emily



Working on presenting our work beautifully

Music – year 2 have been rockers this week!

Mila

My music responses

Title: Smack on the water Deep
Composer: Pepp purple

This is what I imagine when I listen to this.



★ My star rating ★



The composer uses these instruments:

- guitar
- Drums
- Shackles
- trumpet
- _____

This music makes me feel:

- happy
- sad
- scared
- sleepy
- love
- angry
- Other: _____

What is the tempo? How fast or slow is the music?
Describe the changes.

start	middle	end
slow	fast	fast

Dynamics. Are there quiet and loud parts? If so, where?

start	middle	end
loud	loud	loud

Describe this piece using 2 words

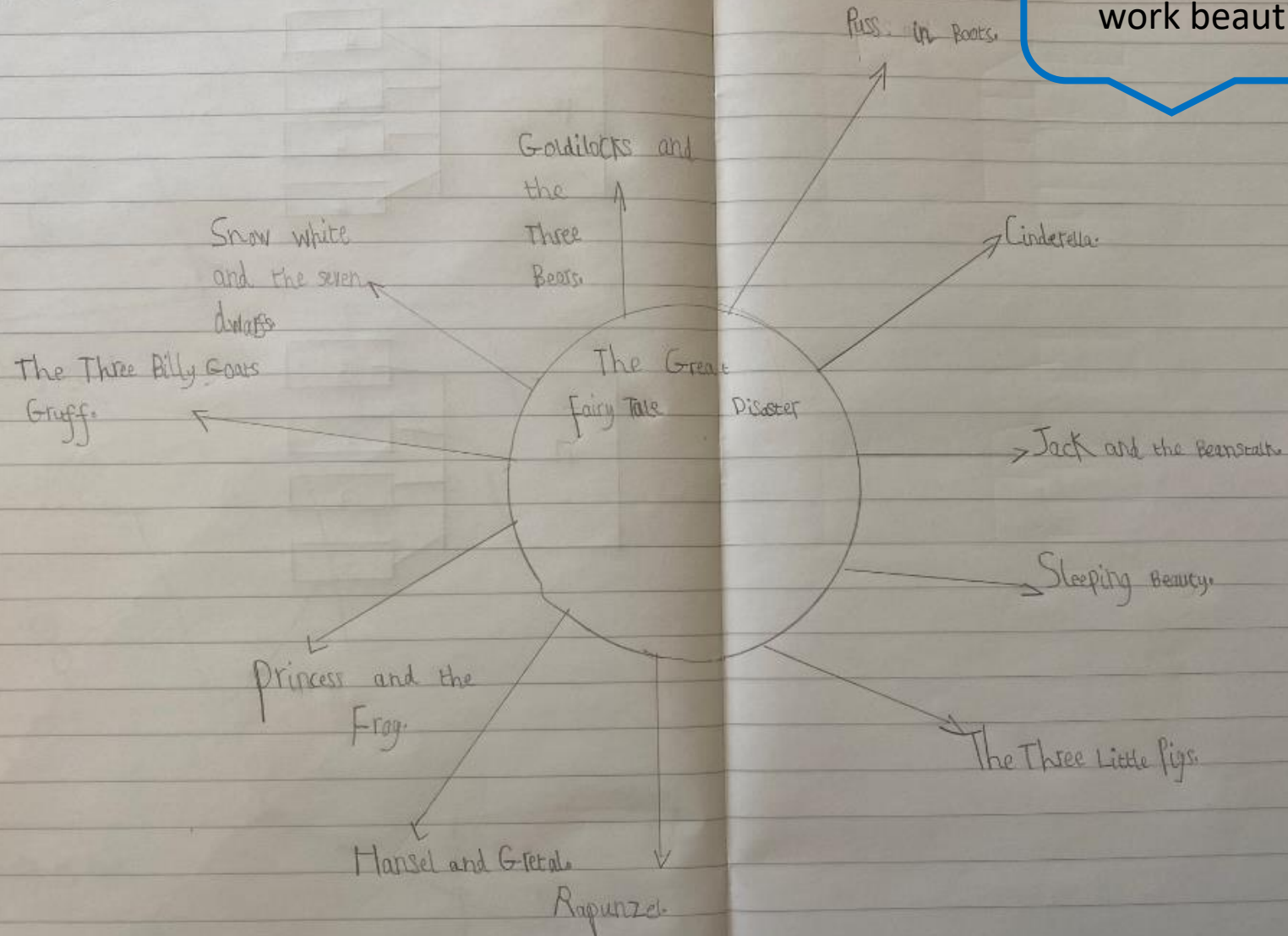
- Rocking
- side

Did you like the piece?



Matilda

I think Cinderella is the best book to visit because Cinderella is kind.



Working on presenting our work beautifully



Crowle Primary Academy

Believe and you can achieve

Spotted Owls

Freddie

22.02.21

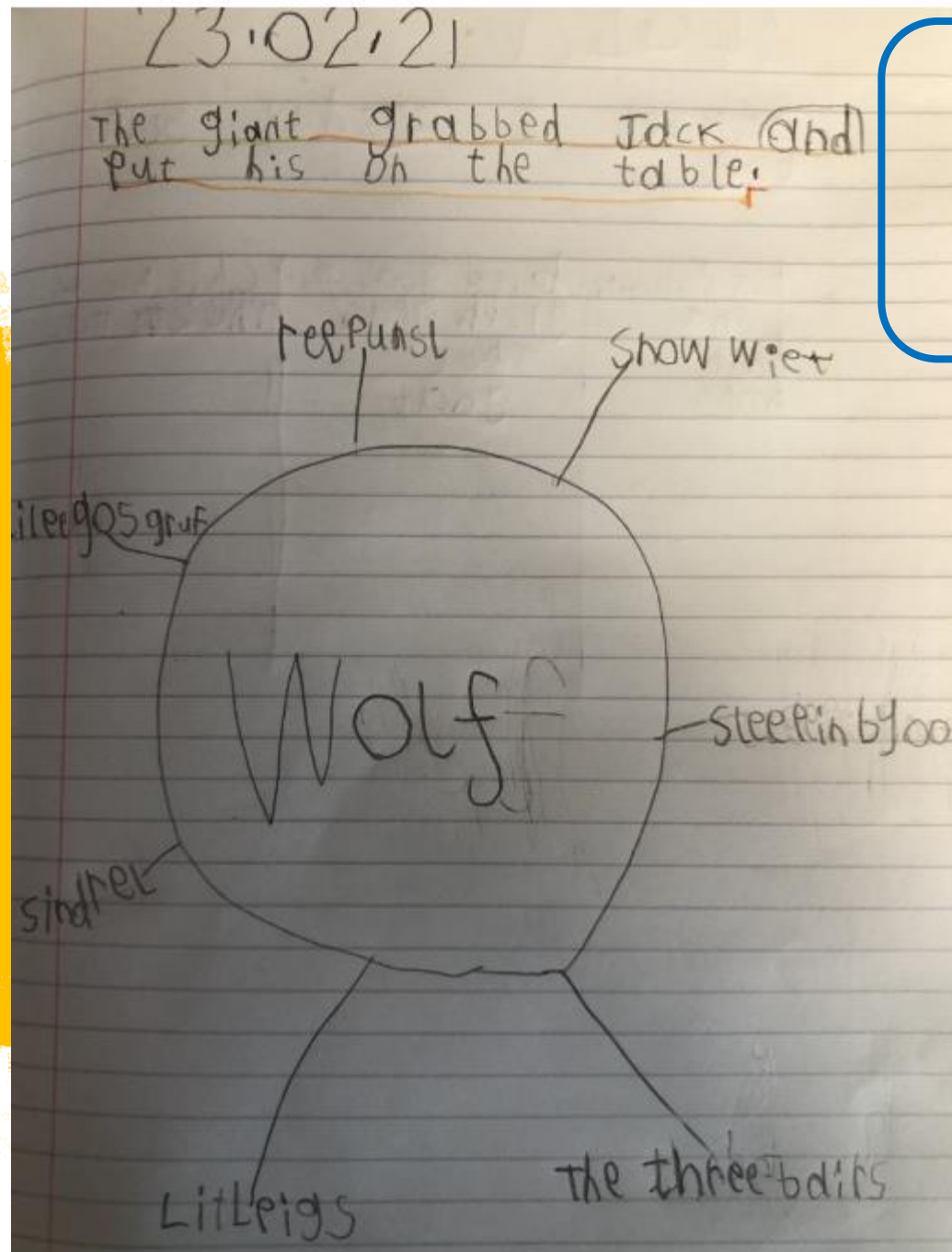
greatest

least



Look at the presentation and great cutting skills!

George



Trying really hard to use my phonics in my writing and working independently

Lilianne

the size of
a baby elephants
the boys h beans
cottage in
the woods
cloak hiding hood
pot snow white
sweet treats
Hansel and Gretel
I think we are learning

Wonderful
presentation

Macey Rae



DT – making moving parts. Resilience used to fix it when it didn't work